

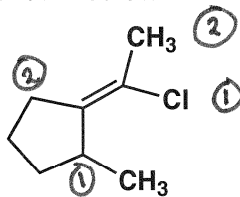
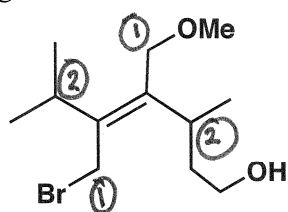
should be #6

CHEM 5.12
PROBLEM SET #5 - Due in Friday April 4th at 4 pm

Prof. B. Imperiali

1. (2 points) Assign Z or E nomenclature to the alkenes shown below

1 point each



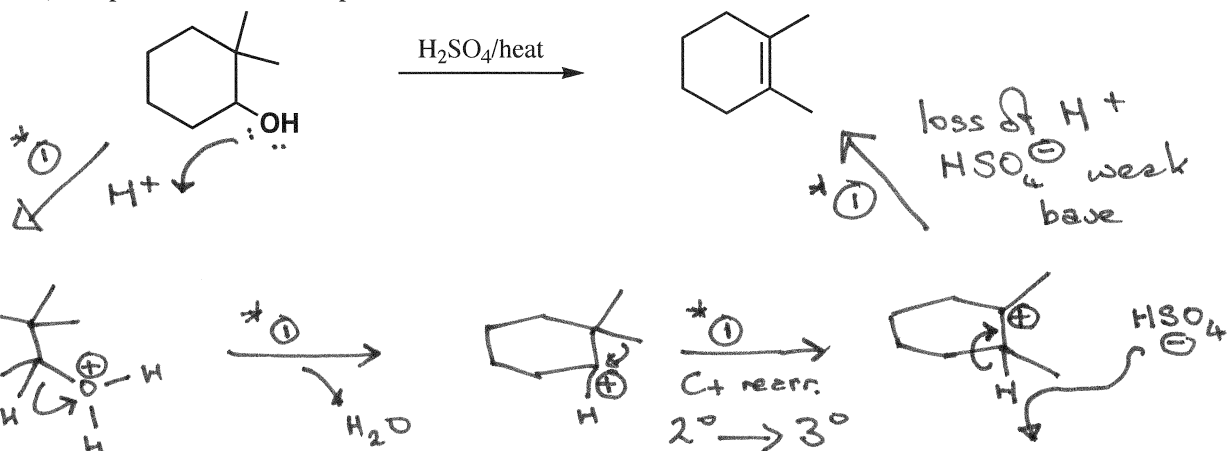
E
(opposite-entgegen)

Z
(same-zusammen)

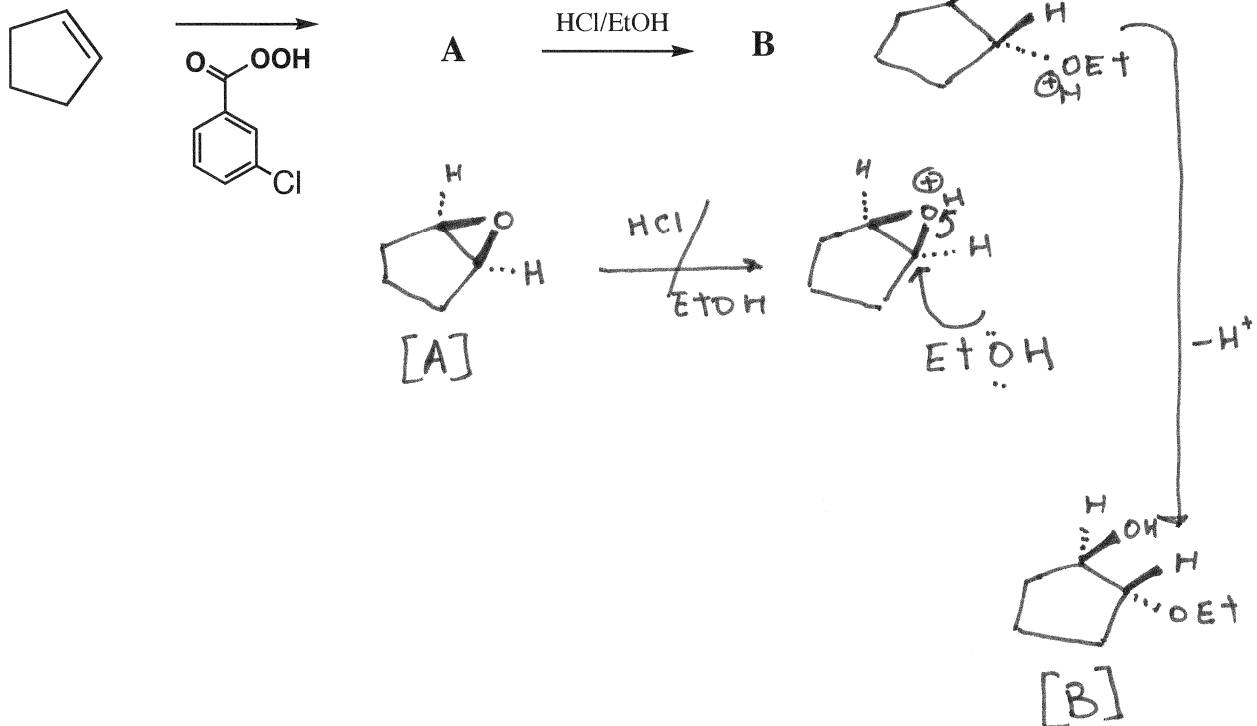
Remember 1 high priority atom takes priority over any number of lower priority

2. (4 points) Propose a detailed stepwise mechanism for the reaction shown below

1 point for each step



3. (4 points) Show the identity of compounds A and B in the reaction scheme shown below



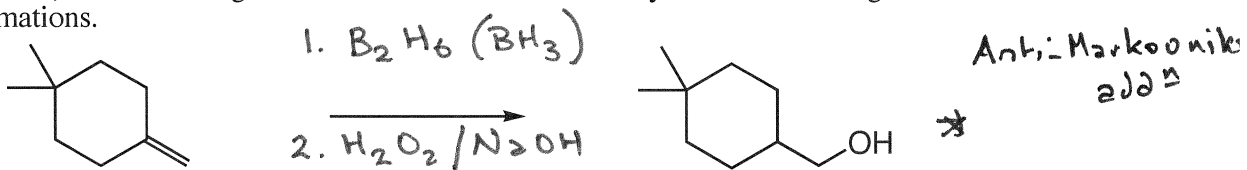
2 for A
2 for B

CHEM 5.12


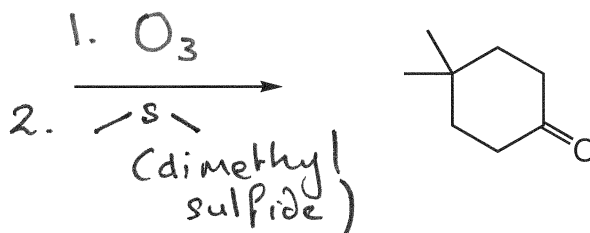
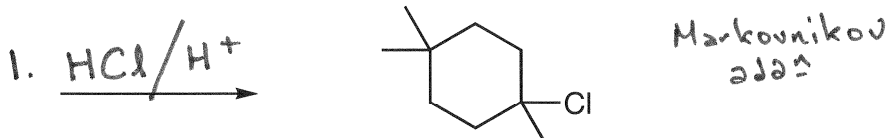
Prof. B. Imperiali

PROBLEM SET #5 (contd) - Due in Friday April 4th at 4 pm

4. (10 points) Show the reagents that would be needed to carry out the following transformations.



2 points each.
 (If 2 steps on point for each step)



Suggested problems: 7.45, 8.18, 8.37, 8.50, 8.51, 8.64, 8.68

OR
 1. B₂H₆
 2. H₂O₂
 3. HBr (S_N2 product from *)